


Name: \_\_\_\_\_

Date: \_\_\_\_\_

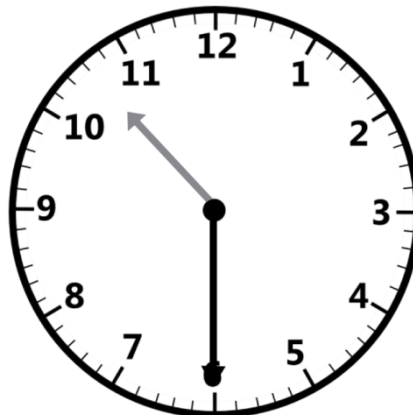
Measurement – Time – Clock Face to the Half Hour

Write the time in the space provided.



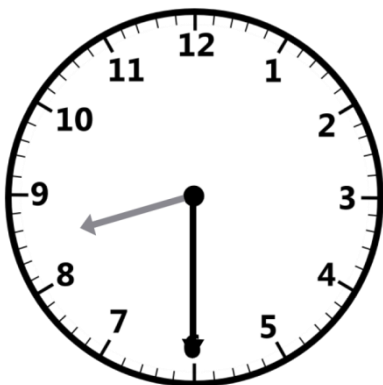
1

\_\_\_\_\_ : \_\_\_\_\_



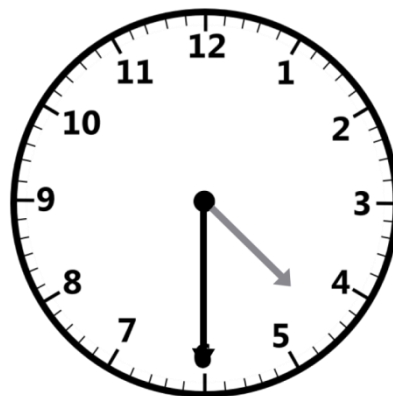
2

\_\_\_\_\_ : \_\_\_\_\_



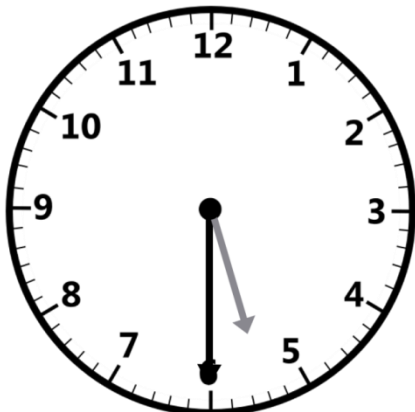
3

\_\_\_\_\_ : \_\_\_\_\_



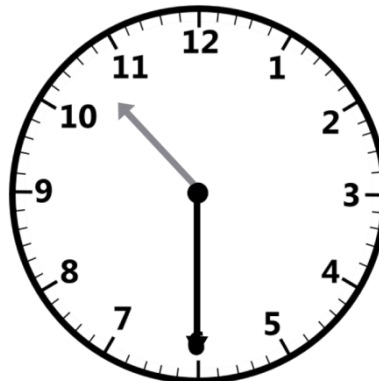
4

\_\_\_\_\_ : \_\_\_\_\_



5

\_\_\_\_\_ : \_\_\_\_\_



6

\_\_\_\_\_ : \_\_\_\_\_