



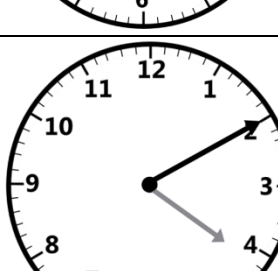


Name: _____

Date: _____

Measurement – Time – Clock Face to Five Minutes

1. Write the time shown on each clock, in the space provided using minutes before or minutes after the hour.
2. Write the time in Digital form in the box provided.

	_____	<input data-bbox="1187 562 1425 653" type="text" value=":"/>
	_____	<input data-bbox="1187 842 1425 932" type="text" value=":"/>
	_____	<input data-bbox="1187 1134 1425 1224" type="text" value=":"/>
	_____	<input data-bbox="1187 1417 1425 1507" type="text" value=":"/>
	_____	<input data-bbox="1187 1711 1425 1801" type="text" value=":"/>