




Represent numbers to 10

Question 1

Which picture shows **10** scissors?

- 
- 
- 



Question 2

Which picture shows **9** pencils?

- 
- 
- 



Question 3

Which picture shows **6** basketballs?

- 
- 
- 

Question 4

Which picture shows **8** pigs?

- 
- 
- 