

Represent numbers to 10




Question 1

Which picture shows **8 cars**?

- 
- 
- 




Question 2

Which picture shows **7 turtles**?

- 
- 
- 



Question 3

Which picture shows **7 kittens**?

- 
- 
- 

Question 4

Which picture shows **4 ladybugs**?

- 
- 
- 