

Represent numbers to 10




Question 1

Which picture shows 4 tractors?

- 
- 
- 



Question 2

Which picture shows 5 oranges?

- 
- 
- 

Question 3

Which picture shows 8 peppers?

- 
- 
- 

Question 4

Which picture shows 7 onions?

- 
- 
- 