

Represent numbers to 10




Question 1

Which picture shows **8** cheetahs?

- 
- 
- 




Question 2

Which picture shows **5** butterflies?

- 
- 
- 

Question 3

Which picture shows **9** rainbows?

- 
- 
- 

Question 4

Which picture shows **7** onions?

- 
- 
- 