

## Represent numbers to 10




### Question 1

Which picture shows **7** trucks?

- 
- 
- 

### Question 2

Which picture shows **5** hens?

- 
- 
- 

### Question 3

Which picture shows **8** puppies?

- 
- 
- 

### Question 4

Which picture shows **6** grasshoppers?

- 
- 
- 