




## Represent numbers to 10




### Question 1

Which picture shows **5** butterflies?

- 
- 
- 




### Question 2

Which picture shows **6** books?

- 
- 
- 

### Question 3

Which picture shows **2** balls of yarn?

- 
- 
- 

### Question 4

Which picture shows **5** ladybugs?

- 
- 
- 